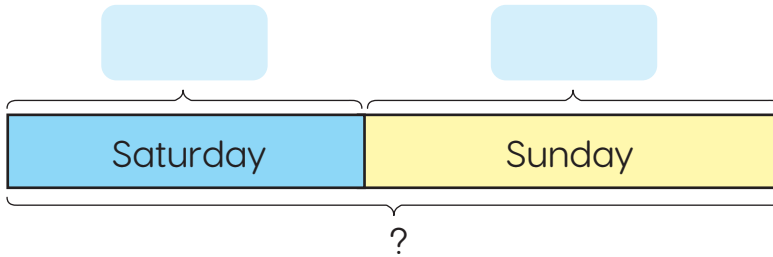





## Let's Practice

1. Dominic's smart watch records the number of steps he takes in a day. On Saturday, he walked 3,435 steps. On Sunday, he walked 5,380 steps. How many steps did he walk in total?



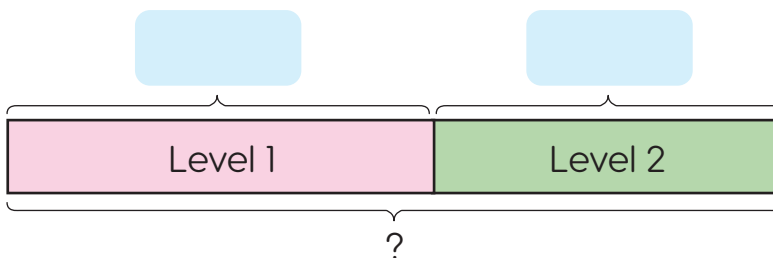
$$\boxed{\phantom{0000}} + \boxed{\phantom{0000}} = \boxed{\phantom{0000}}$$

Dominic walked  steps in total.

+

---

2. Riley was playing a computer game. On Level 1, she scored 1,847 points. On Level 2, she scored 1,465 points. Find the total number of points she scored.



$$\boxed{\phantom{0000}} + \boxed{\phantom{0000}} = \boxed{\phantom{0000}}$$

Riley scored a total of  points.

+

---